

Released Items

Student Name: \_\_\_\_\_


Fall 2014  
NC Final Exam  
**Grade 6 Science**



# Student Booklet



Public Schools of North Carolina  
State Board of Education  
Department of Public Instruction  
Raleigh, North Carolina 27699-6314



1 This chart gives the physical properties of copper.

**Physical Properties of Copper**

<b>Element</b>	<b>Density</b>	<b>Melting Point</b>	<b>Boiling Point</b>
copper	8.96 g/cm <sup>3</sup>	1,084°C	2,560°C

How does the density of a 4-g sample of copper compare to that of a 12-g sample of copper?

- A Its density is one-half the density of the 12-g sample.
- B Its density is the same density as the 12-g sample.
- C Its density is twice the density of the 12-g sample.
- D Its density is three times the density of the 12-g sample.

2 Which is considered a good insulator of heat?

- A aluminum, because it allows heat to flow easily
- B glass, because it allows heat to flow easily
- C plastic, because heat is unable to flow easily through it
- D silver, because heat is unable to flow easily through it

3 Why are there high and low tides on Earth?

- A They are due to changes in the moon's tilt on its axis.
- B They are due to the gravitational pull between Earth and the moon.
- C They are due to the magnetic force between Earth and the moon.
- D They are due to changes in the moon's speed every month.

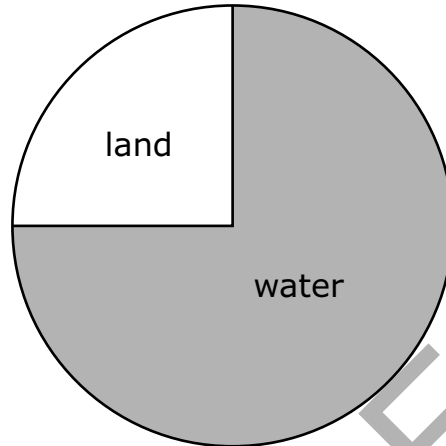


- 4 Which contributes to Earth's ability to sustain life?
- A The atmosphere allows all of the sun's radiation to enter due to Earth's distance from the sun.
  - B The atmosphere prevents all space debris from reaching the surface due to the ozone layer.
  - C The atmosphere is extremely thin due to the temperatures of the sun.
  - D The atmosphere is breathable due to the unique mixture of gases.
- 5 How does gravity support life on Earth?
- A by forcing Earth to continuously spin on its axis, which contributes to day and night
  - B by causing changes in the distance between Earth and the sun, which contributes to the seasons
  - C by keeping water and gases in the atmosphere close to Earth's surface, which contributes to life processes
  - D by preventing meteors and comets from hitting Earth's surface, which protects living organisms from space fragments



6 The diagram below shows the composition of the surface of Earth.

**Composition of the Surface of Earth**



Which **best** summarizes the composition of the surface of Earth?

- A Three-fourths of Earth's surface is land.
  - B One-fourth of Earth's surface is water.
  - C Earth's surface contains more land than water.
  - D Earth's surface contains more water than land.
- 7 Which is the basic composition of Earth's core?
- A The solid inner core is surrounded by a liquid outer core.
  - B The liquid inner core is surrounded by a solid outer core.
  - C Both the inner core and the outer core are solid.
  - D Both the inner core and the outer core are liquid.



- 8 Which **best** explains the movement of tectonic plates?
- A They move several miles each year because of convection within Earth.
  - B They move several centimeters each year because of convection within Earth.
  - C They move several feet each year because of convection within Earth.
  - D They move several kilometers each year because of convection within Earth.

9 This chart compares three different types of waves.

**Comparison of P-Waves, Sound Waves, and Light Waves**

<b>Waves</b>	<b>Occurrence</b>	<b>Wave Characteristics</b>
P-wave	earthquake	compressions and rarefactions
sound	vibrating objects	compressions and rarefactions
light	vibrating charges	crests and troughs

How do the wave characteristics compare for these waves?

- A Sound waves and P-waves are longitudinal waves, while light waves are transverse waves.
- B Light waves and P-waves are transverse waves, while sound waves are longitudinal waves.
- C Sound waves, P-waves, and light waves are all longitudinal waves.
- D Light waves, P-waves, and sound waves are all transverse waves.



- 10 Which **best** explains the relationship between parent rock and soil composition?
- A Weathered parent rock determines the number of organisms found in the soil.
  - B Weathered parent rock determines the amount of air found in the soil.
  - C Weathered parent rock is the largest component of soil.
  - D Weathered parent rock is the smallest component of soil.
- 11 This illustration shows the reaction of a plant when placed near a light source.



What would happen to the plant if it were turned away from the light source?

- A The plant would stop growing.
- B The plant would be unaffected.
- C The plant would move away from the light source.
- D The plant would bend towards the light source.



- 12 Tulips are flowers that typically bloom in the spring. How could tulips be forced to bloom in winter?
- A by limiting pruning and trimming of the tulips
  - B by reducing water levels and nutrient uptake by the tulips
  - C by elevating oxygen levels and supplying organic matter to the tulips
  - D by increasing temperature and lengthening daylight for the tulips
- 13 How does sound usually travel?
- A An object vibrates, and those vibrations travel through the air in one direction as transverse waves.
  - B An object vibrates, and those vibrations carry air in one direction as longitudinal waves.
  - C An object vibrates, and those vibrations carry air in all directions as transverse waves.
  - D An object vibrates, and those vibrations travel through the air in all directions as longitudinal waves.
- 14 Which is true for every atom of an element?
- A It can be seen with a magnifying glass.
  - B It is joined together with another atom.
  - C It has mass and volume.
  - D It is weightless.



- 15 A student has two pieces of aluminum foil. Each piece can be folded and rolled into a wire. Why do both pieces of aluminum foil behave the same way?
- A They are composed of the same types of atoms.
  - B They are composed of different types of atoms.
  - C They have the same physical properties, but different chemical properties.
  - D They have the same chemical properties, but different physical properties.

RELEASED






**This is the end of the Grade 6 Science Released Items.**

**Directions:**


- 1. Look back over your answers for the test questions.**
- 2. Make sure all your answers are entered on the answer sheet. Only what is entered on your answer sheet will be scored.**
- 3. Put all of your papers inside your test book and close the test book.**
- 4. Stay quietly in your seat until your teacher tells you that testing is finished.**
- 5. Remember, teachers are not allowed to discuss items from the test with you, and you are not allowed to discuss with others any of the test questions or information contained within the test.**

RELEASED



**Grade 6 Science  
RELEASED Items<sup>1</sup>  
Fall 2014  
Answer Key**

<b>Item Number</b>	<b>Type<sup>2</sup></b>	<b>Key</b>	<b>Percent Correct<sup>3</sup></b>	<b>Standard</b>
1	MC	B	25%	6.P.2.3
2	MC	C	41%	6.P.3.3
3	MC	B	69%	6.E.1.1
4	MC	D	59%	6.E.1.2
5	MC	C	56%	6.E.1.2
6	MC	D	91%	6.E.2.1
7	MC	A	44%	6.E.2.1
8	MC	B	57%	6.E.2.2
9	MC	A	55%	6.P.1.1
10	MC	C	41%	6.E.2.3
11	MC	D	62%	6.L.2.2
12	MC	D	66%	6.L.2.2
13	MC	D	45%	6.P.1.3
14	MC	C	49%	6.P.2.1
15	MC	A	71%	6.P.2.1




<sup>1</sup>These released items were administered to students during a previous test administration. This sample set of released items may not reflect the breadth of the standards assessed and/or the range of item difficulty found on the NC Final Exam. Additional items may be reviewed at <http://www.ncpublicschools.org/accountability/common-exams/released-forms/>. Additional information about the NC Final Exam is available in the *Assessment Specification* for each exam located at <http://www.ncpublicschools.org/accountability/common-exams/specifications/>.

<sup>2</sup>This NC Final Exam contains only multiple-choice (MC) items.

<sup>3</sup>Percent correct is the percentage of students who answered the item correctly during the Spring 2014 administration.

RELEASED



## Standard Descriptions

Only clarifying objective descriptions addressed by the released items in this booklet are listed below. A complete list of the North Carolina Essential Standards for Science and Social studies may be reviewed at <http://www.ncpublicschools.org/acre/standards/new-standards/>.

### 6.P.1.1 (Forces and Motion)

Compare the properties of waves to the wavelike property of energy in earthquakes, light and sound.

### 6.P.1.3 (Forces and Motion)

Explain the relationship among the rate of vibration, the medium through which vibrations travel, sound and hearing.

### 6.P.2.1 (Properties and Change)

Recognize that all matter is made up of atoms and atoms of the same element are all alike, but are different from the atoms of other elements.

### 6.P.2.3 (Properties and Change)

Compare the physical properties of pure substances that are independent of the amount of matter present including density, melting point, boiling point, and solubility to properties that are dependent on the amount of matter present to include volume, mass and weight.

### 6.P.3.3 (Conservation and Transfer)

Explain the suitability of materials for use in technological design based on a response to heat (to include conduction, expansion, and contraction) and electrical energy (conductors and insulators).

### 6.E.1.1 (Earth in the Universe)

Explain how the relative motion and relative position of the sun, Earth and moon affect the seasons, tides, phases of the moon, and eclipses.

### 6.E.1.2 (Earth in the Universe)

Explain why Earth sustains life while other planets do not based on their properties (including types of surface, atmosphere and gravitational force) and location to the Sun.

### 6.E.2.1 (Earth Systems, Structures and Processes)

Summarize the structure of the earth, including the layers, the mantle and core based on the relative position, composition and density.

### 6.E.2.2 (Earth Systems, Structures and Processes)

Explain how crustal plates and ocean basins are formed, move and interact using earthquakes, heat flow and volcanoes to reflect forces within the earth.

### 6.E.2.3 (Earth Systems, Structures and Processes)

Explain how the formation of soil is related to the parent rock type and the environment in which it develops.

### 6.L.2.2 (Ecosystems)

Explain how plants respond to external stimuli (including dormancy and forms of tropism) to enhance survival in an environment.